

あといくつで10でしょう

なまえ	
-----	--

①  $8 + \square = 10$

⑪  $6 + \square = 10$

②  $7 + \square = 10$

⑫  $8 + \square = 10$

③  $9 + \square = 10$

⑬  $7 + \square = 10$

④  $6 + \square = 10$

⑭  $9 + \square = 10$

⑤  $5 + \square = 10$

⑮  $6 + \square = 10$

⑥  $8 + \square = 10$

⑯  $8 + \square = 10$

⑦  $9 + \square = 10$

⑰  $7 + \square = 10$

⑧  $7 + \square = 10$

⑱  $9 + \square = 10$

⑨  $6 + \square = 10$

⑲  $8 + \square = 10$

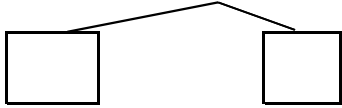
⑩  $8 + \square = 10$

⑳  $7 + \square = 10$

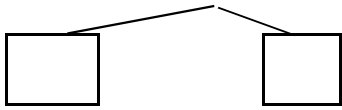
①  $8 + 4 =$



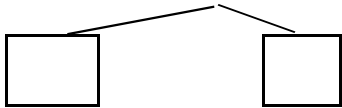
②  $9 + 3 =$



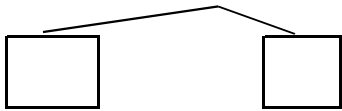
③  $7 + 4 =$



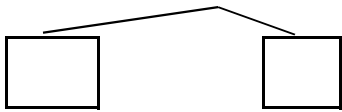
④  $6 + 5 =$



⑤  $8 + 3 =$



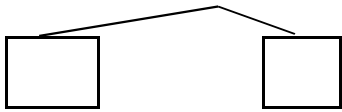
⑥  $7 + 5 =$



⑦  $8 + 4 =$



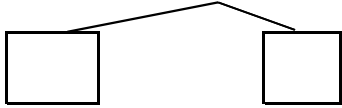
⑧  $9 + 4 =$



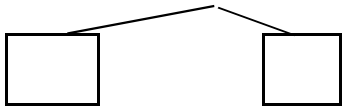
$$\textcircled{1} \quad 8 + 3 =$$



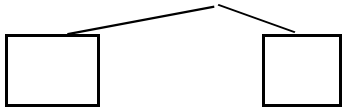
$$\textcircled{2} \quad 9 + 6 =$$



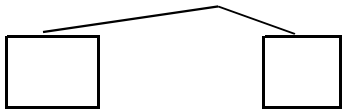
$$\textcircled{3} \quad 7 + 7 =$$



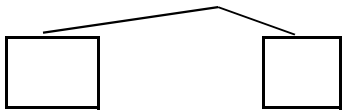
$$\textcircled{4} \quad 6 + 4 =$$



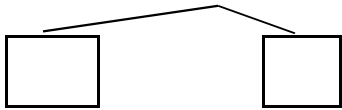
$$\textcircled{5} \quad 8 + 6 =$$



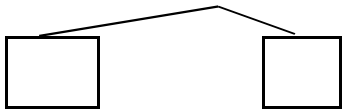
$$\textcircled{6} \quad 7 + 6 =$$

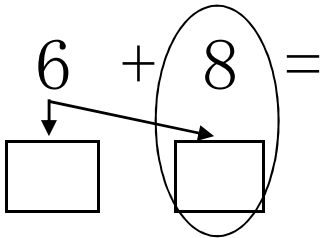


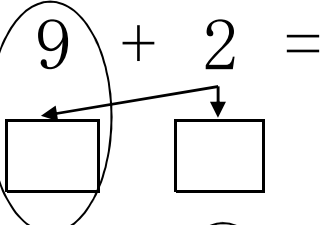
$$\textcircled{7} \quad 8 + 3 =$$

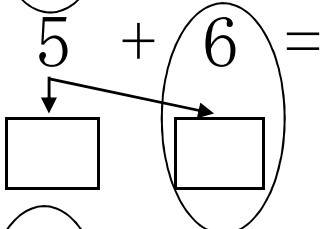


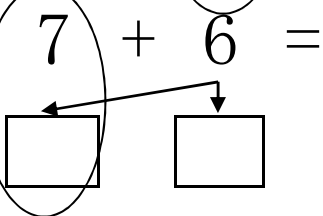
$$\textcircled{8} \quad 9 + 7 =$$

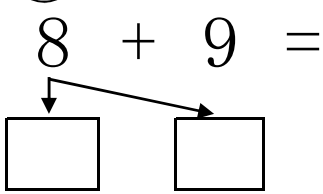


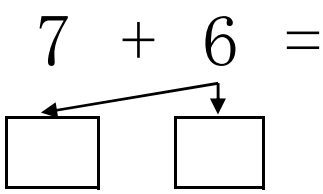
①  $6 + 8 =$   


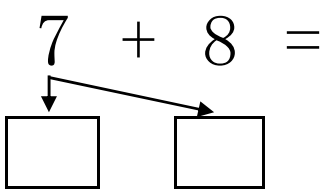
②  $9 + 2 =$   


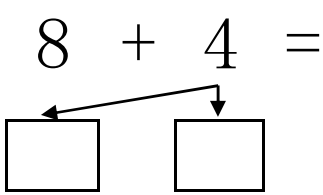
③  $5 + 6 =$   


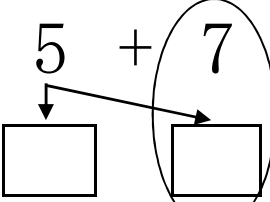
④  $7 + 6 =$   


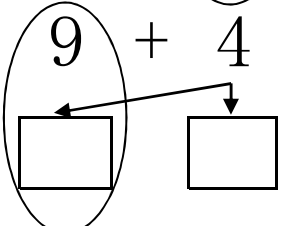
⑤  $8 + 9 =$   


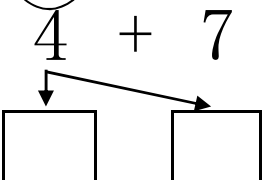
⑥  $7 + 6 =$   


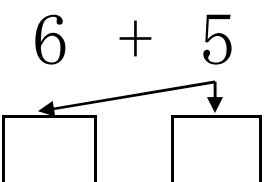
⑦  $7 + 8 =$   


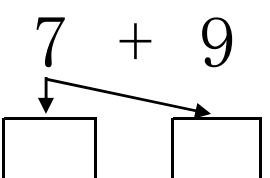
⑧  $8 + 4 =$   


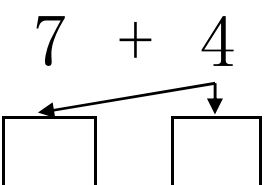
①  $5 + 7 =$   


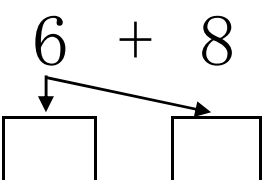
②  $9 + 4 =$   


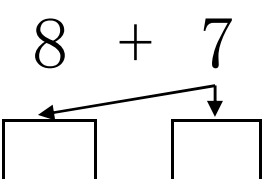
③  $4 + 7 =$   


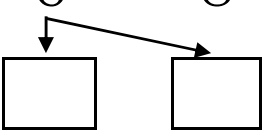
④  $6 + 5 =$   


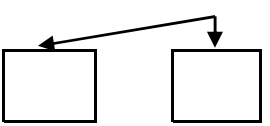
⑤  $7 + 9 =$   


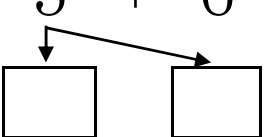
⑥  $7 + 4 =$   


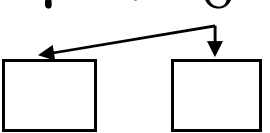
⑦  $6 + 8 =$   


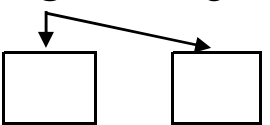
⑧  $8 + 7 =$   



①  $6 + 8 =$   


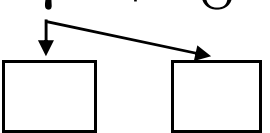
②  $9 + 2 =$   


③  $5 + 6 =$   


④  $7 + 6 =$   


⑤  $8 + 9 =$   


⑥  $7 + 6 =$   


⑦  $7 + 8 =$   


⑧  $8 + 4 =$   
