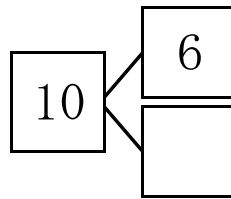
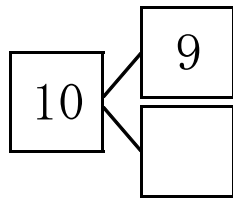
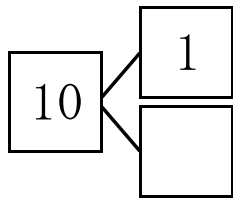
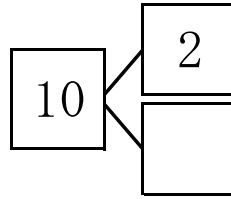
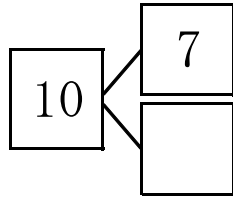
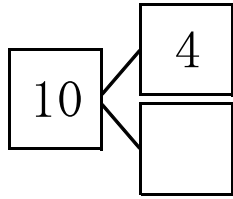
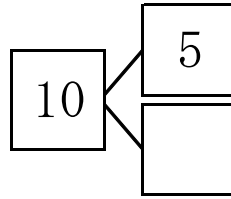
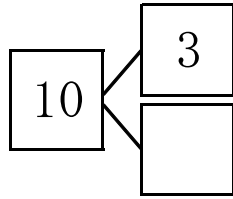
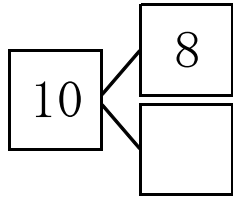


あといくつかで10？ () 組 ())



$$5 + \square = 10$$

$$10 - 6 = \square$$

$$7 + \square = 10$$

$$10 - 3 = \square$$

$$4 + \square = 10$$

$$10 - 5 = \square$$

$$9 + \square = 10$$

$$10 - 7 = \square$$

$$2 + \square = 10$$

$$10 - 1 = \square$$

$$1 + \square = 10$$

$$10 - 4 = \square$$

$$6 + \square = 10$$

$$10 - 8 = \square$$

$$8 + \square = 10$$

$$10 - 2 = \square$$

$$3 + \square = 10$$

$$10 - 9 = \square$$